

# Ratio Word Problems with Double Number Lines

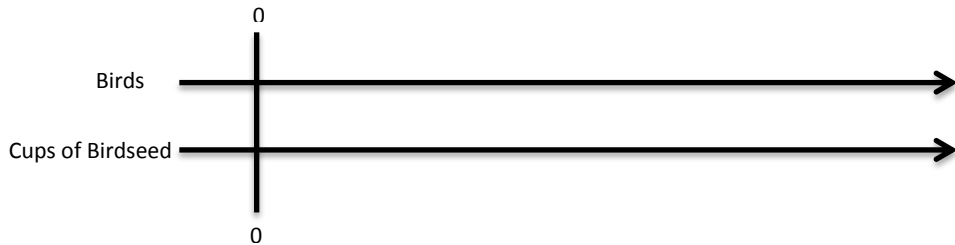
1) Last spring 12 birds ate 8 cups of birdseed in one month. If I am expecting 18 birds this month, how many cups of birdseed do I need?

Complete the double number line and ratio table to support your answer.



Simplified ratio of birds to cups: \_\_\_\_\_

Birds	Birdseed (in cups)
12	



Cups of birdseed for 18 birds: \_\_\_\_\_

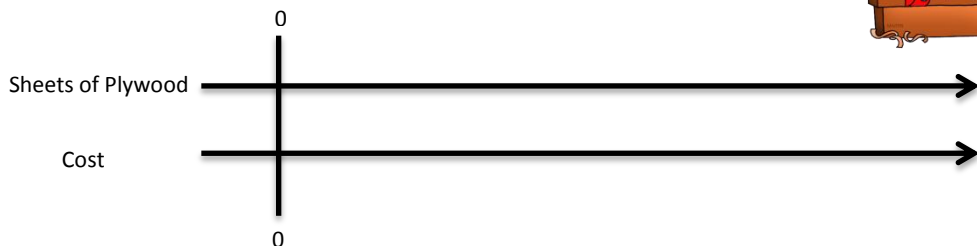


2) A builder can buy 6 sheets of plywood for \$33. At that rate, how much would 14 sheets of plywood cost? Complete the double number line and ratio table to support your answer.

Simplified ratio of sheets to cost: \_\_\_\_\_



Sheets of Plywood	Cost (in dollars)
6	



Cost for 14 sheets of plywood: \_\_\_\_\_



Ratio Tables and Number Lines Continued


3) It takes Peter 18 minutes to complete 30 math problems. At this rate, how long will it take him to complete 40 math problems?

Complete the double number line and ratio table to support your answer.

Simplified ratio of minutes to problems: \_\_\_\_\_



Time (in minutes)	Math Problems
18	
	40



Time to complete 40 math problems: \_\_\_\_\_

**Math Rocks! Math Rocks! Math Rocks! Math Rocks! Math Rocks! Math Rocks!**

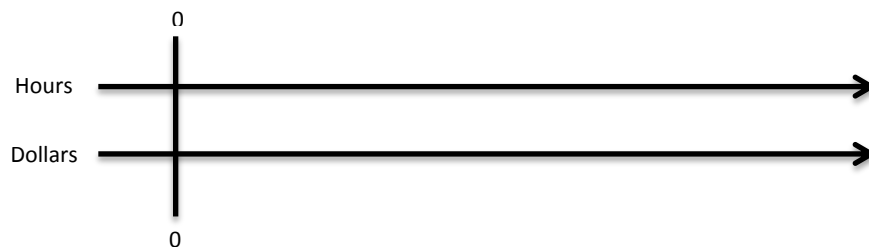
4) Sonja worked for 16 hours last week and earned \$136? This week she will get 24 hours. How much money will she make?

Complete the double number line and ratio table to support your answer.

Simplified ratio of hours to dollars: \_\_\_\_\_



Hours	Dollars
16	



Dollars for 24 hours: \_\_\_\_\_

